


Name _____

Pecking Out Ratios

Write the ratios in fraction form

There are four hens.



There are three nests.


We say: "The ratio of hens to nests is four to three."

We write: Hens \rightarrow 4
Nests \rightarrow 3


Write each ratio.



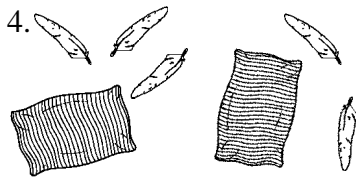
eggs \rightarrow 5
to
chicks \rightarrow 7



beaks \rightarrow _____
to
feet \rightarrow _____



chicken \rightarrow _____
to
drumstick \rightarrow _____




pillows \rightarrow _____
to
feathers \rightarrow _____




wheat \rightarrow _____
to
corn \rightarrow _____



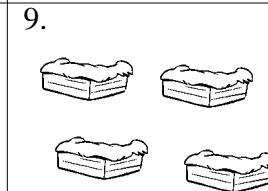
hen \rightarrow _____
to
chick \rightarrow _____



roosters \rightarrow _____
to
grasshoppers \rightarrow _____



carton \rightarrow _____
to
eggs \rightarrow _____



nests \rightarrow _____
to
henhouse \rightarrow _____

On the back of your paper draw your own ratio problem. Use pictures to express your problem. Write the ratio out in numbers and in words.